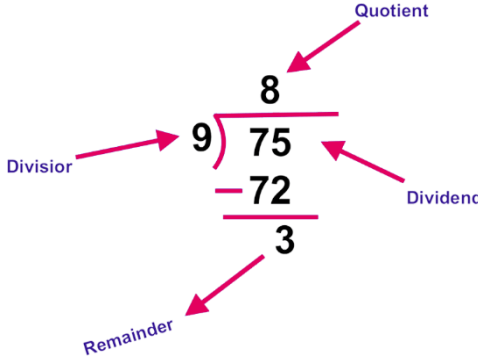


2. DIVISION SUM- Solve the below given division and write divisor dividend quotient remainder (one is done for you)-

 <p> Divisor-9 Dividend-75 Quotient-8 Remainder-3 </p>	$476390 \div 56$
$107 \div 15$	$12089 \div 57$
$630169 \div 42$	$49600 \div 62$
$549945 \div 55$	$25256 \div 308$
$810184 \div 764$	$2360 \div 420$

SECOND WEEK

Multiplication Sum – Solve the given multiplications:

345×55	241×12
234×15	2054×16
850×69	703×142
2168×256	1254×324
76×23	4380×57

THIRD WEEK

I. Balance the scales by writing the extra weights needed.

(i) $500\text{ g} + 200\text{ g} + \dots\dots\dots\text{ g} + \dots\dots\dots\text{ g} = 1000\text{ g}$

(ii) $800\text{ g} + \dots\dots\dots\text{ g} + \dots\dots\dots\text{ g} = 1000\text{ g}$

(iii) $300\text{ g} + \dots\dots\dots\text{ g} + \dots\dots\dots\text{ g} = 1000\text{ g}$

(iv) $700\text{ g} + \dots\dots\dots\text{ g} + \dots\dots\dots\text{ g} = 1000\text{ g}$

(v) $200\text{ g} + \dots\dots\dots\text{ g} + \dots\dots\dots\text{ g} + \dots\dots\dots\text{ g} = 1000\text{ g}$

II. Solve the following

A)	Km	m	B)	Kg	gm						
	2	5	4	6	2	1	0	8			
+	3	7	0	5	7	+	7	5	2	2	2
C)	L	ml	D)	H	sec						
	5	4	7	8	3		0	2	4	0	
+	2	5	1	5	3	+	1	2	0	3	

A)	Km	m	B)	Kg	gm						
	6	5	4	3	5		8	2	6	0	8
-	3	7	0	5	5	-	7	5	2	2	2
C)	L	ml	D)	H	sec						
	5	4	7	8	3		5	2	4	7	
-	2	5	1	5	3	-	1	2	0	3	

III. A shopkeeper buys a football for ₹150 and sells it at ₹210. What is his profit or loss?

Ans:.....

IV. A man bought 360 eggs at ₹ 18 per dozen. 40 eggs were broken and 20 egg were rotten. What would be his profit or loss if he sells the rest at ₹ 20 per dozen?

Ans:.....

V. A car travels 120 km in 2 hours; find the speed of the car.

Ans:.....

VI. A bus covers a distance of 325 kms in 5 hours. Find its average speed.

Ans:.....

FOURTH WEEK

I. Write the numerals for the given numbers:

S.No.	Number Name	Number
(i)	Six lakh, fifteen thousand, eighty-four	_____
(ii)	Twenty thousand, nine	_____
(iii)	Four lakh, thirty-two thousand, seven hundred ninety-two	_____
(iv)	Three lakh, twelve thousand, eighteen	_____
(v)	Nine lakh, eighty-eight thousand, ninety-eight	_____

II. Write the number name for the given numbers:

S.No.	Number	Number Name
(i)	1,38,640	_____
(ii)	7,08,241	_____
(iii)	9,00,002	_____
(iv)	7,77,777	_____

III. Answer the following:

(i) The largest 6-digit number is

(ii) The smallest 6-digit number is

IV. Write the number names for the following numerals.

a. 24382 = _____

b. 89431 = _____

c. 65428 = _____

d. 56467 = _____

e. 36009 = _____

4. Write the numerals for the following number names:

(i) Seventy-five thousand five hundred and forty-four. = _____

(ii) Eighty-two thousand five hundred and thirteen. = _____

(iii) Seventy thousand five hundred and ten = _____

(iv) Eighty-nine thousand three hundred and twenty-four = _____

(v) Ninety thousand six hundred and twenty-five = _____

FIFTH WEEK

a. In class of 44 students there are 13 girls. Find how many boys are there?

Ans.....

b. Rajiv has 5 rose, 12 marigolds and 2 lotuses. Find how many flowers he had?

Ans.....

c. In a class of 42 students, each student has contributed ₹12 for helping old age people. How much money the class has collected?

Ans.....

d. 45 toys are distributed in 9 friends. How many toys each got?

Ans.....

e. In a cuboid find the number of:

Faces =

Edges =

Vertex =

f. In a cube find the number of:

Faces =

Edges =

Vertex =

Convert the following: -

a) 2Km =m

c) 5Kg = Gm

e) 2L = Ml

g) 2H = min

b) 25000m = Km

d) 3000gm = Kg

f) 5000ml = L

SIXTH WEEK

(i) 2 – D shapes using cardboard (Roll Number 1 – 5) {<https://youtu.be/imnShHGpcjk>}

(ii) 3 – D shapes using cardboard (Roll Number 6 – 10) {<https://youtu.be/Z9wp7kOH3xs>}

(iii) Make fraction Machine (Roll Number 11 – 20) {<https://youtu.be/GyK6l9tx3W8>}

(iv) Place value model (Roll Number 21- 30) {<https://youtu.be/LbEqH25ndf0>}

(v) Place value model (Roll Number 31- 40) {<https://youtu.be/kXvV56gtCNs>}

(vi) LCM & HCF model (Roll Number 40 – 46) {<https://youtu.be/uDAn1ANVSNY>}

enjoy
SUMMER
HOLIDAYS



Class – V
EVS

Summer
HOLIDAY



SESSION:2023-24

Dear Student

- **Summer Vacation is the best and the most fruitful time for learning and nurturing creativity.**

Keeping this objective in mind we have planned diverse and exciting activities that will enhance your knowledge and boost your creativity.

- **“A healthy mind lives in a healthy body”.**

So play the sport of your choice INDOORS/OUTDOORS.

It will help to instill discipline, generate sporting spirits and channelize your energies constructively.

- **Get up early in the morning and see the rising sun.**

Do indoor /outdoor exercises / yoga and stay healthy and fit. Spend quality time with your elders and share your thoughts and ideas with them.

- **Eat healthy food and drink lots of water during summer.**

Don'ts:

**Don't dirty your place of living.
Don't have junk food.
Don't watch too much TV.
Don't waste time being lazy.**

Feed the birds and keep a water pot for them.

WORKSHEET-1

Q[1] Choose the correct option.

1. Where is Jim Corbett National Park? []

(a) Delhi (b) Jharkhand (c) Uttar Pradesh (d) Uttarakhand

2. Dolphins send messages through _____ wave. []

(a) Ultraviolet (b).Infrared rays (c).Supersonic (d).Visible rays

3. Male insects recognise their females by their _____. []

(a).Smell (b).Touch. (c).Hair. (d) .Waves

Q [2] Its Riddles Time Guess who am I ?

a) I mark my territory on the road. I can tell if another one like me has entered in my territory by the smell of its urine or potty . _____

b) I sleep for nearly 17 hours a day while dangling upside down from a tree branch. _____

3 Solve the puzzle below

1. It is a hibernating animal.
2. It can feel the vibration of the sound and hear.
3. They make different sounds to give messages to each other
4. It sleeps for two hours a day
5. It is an endangered bird
6. It has very sensitive whiskers to sense the vibration in air
7. It is killed for its Horn
8. It is killed for is tusk
9. Its musk is used to make scent
10. It is killed for its skin
- 11.It can rotate its neck to 270 degrees.




Task .Let's Go Green How exciting

It is to see a plant growing when you grow it with your little hands! The hobby of gardening is good for health, fitness and recreation. It involves physical activity in open air. We get immense pleasure from the sight of flowers, plants, leaves and fruits. This summer, let's become gardeners and learn about some farming also.

1. Have fun growing a plant .You can grow a plant (herbs such as mint, coriander, lettuce, ornamental plants, air purifier plants etc.) in used coconut shells, discarded plastic bottles, jugs, broken coffee mugs etc.


2. Create a planter using any old can or plastic bottles and decorate with any recycled materials. Some of the examples are given below



**Grow a plant in a pot and
click a picture with it.**

WORKSHEET-2

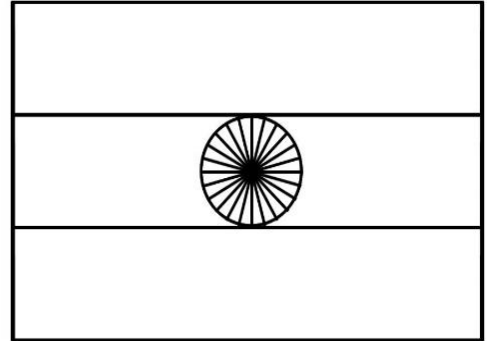
Learn and write capitals of states of India.



States and Capitals

GK

Country : _____



Andhra Pradesh _____

Arunachal Pradesh _____

Assam _____

Bihar _____

Chhattisgarh _____

Goa _____

Gujarat _____

Haryana _____

Himachal Pradesh _____

Jammu and Kashmir _____

Jharkhand _____

Karnataka _____

Kerala _____

Madhya Pradesh _____

Maharashtra _____

Manipur _____

Meghalaya _____

Mizoram _____

Nagaland _____

Odisha _____

Punjab Chandigarh _____

Rajasthan _____

Sikkim Gangtok _____

Tamil Nadu _____

Tripura _____

Uttar Pradesh _____

Uttarakhand _____

West Bengal _____

Fill in names of states in this map. Also colour states with different colours



WORKSHEET-3

Q[1] Continue the following lines...

(i)Some tribal people in Andaman Islands escaped the danger of Tsunami in 2004.

Because _____

(ii) Meera asked her Teacher , “ Sir, how can a tiger know if there is another tiger in its area?” Her Teacher replied, “ Listen Meera,

(iii)Aman and his sister saw some Lizards in their home during summer but they did not see them during winter. Aman was surprised. But his sister said , “ Don’t be confused , brother. Listen

(iv) Dogs are used in rescue operations by the police. Because _____

(v) We can not see birds ears. Its because _____

Q[2] Answer the following questions –

1. What are endangered animals?

2. Who are poachers?

3. Can human beings also be a threat to animals ? How ?

4. Why birds move their neck so often?

5. What are sense organs? How are they useful to human beings ?

Q [3] Choose the correct option.

[1] Which of the following have hearing organs on their front legs ? []

[a] squirrel [b] viper [c] rabbit [d] Bush cricket

[2] Which animal has 100 times more taste buds than human tongue ? []

[a] cats [b] catfish [c] dogs [d] bear

[3] Which animal can spot a mouse in darkness ? []

[a] Eagle [b] vulture [c] pigeon [d] owl

[4] What does a snake do with his tongue? []

[a] taste, hear [b] test, smell [c] see, smell [d] smell , hear

[5] Animals that have a very good sense of site ? []

[a] owl , elephant [b] dog ,snake [c] Eagle , cat [d] spider, crocodile

[6] Butterflies taste their food with []

[a] feet [b] tongue [c]antenna [d]Eyes

[7] Dolphins find their way with the help of..... []

[a] antenna [b]eyes [c]Echo [d]tongue

[8] The animals detect the disasters before they happen due to..... []

[a] super sense of hearing [b] super sense of site

[c] super sense of touch [d] super sense of taste

[9] Which animal can sense a vibration in underwater through their Jaws? []

[a] crocodile [b] Dolphin [c]Shark [d] alligator


[10] Which animal has a good sense of smell ? []

[a] bear [b]ant [c]cow [d]grasshopper

WORKSHEET-4

Observe the following pictures and fill in the blanks-


A. Snakes are an important part in the life of
 .They carry the snakes from village to village in
 Baskets. They make the snakes dance by playing the




B. It is a special dance of the people of known as
 dance. The movements in this dance will be similar to
 the dance of the The dancers wear long black
 with silver ribbons



C. , and
 Tumba are the musical instruments used by the been party. Except
 Dhol all other things are made up of



D. Snakes have two hollow teeth called When it
 bites the enters the person's body through these.



Q [2] Name the following

(i) Three poisonous snakes found in our country.

.....

(ii) Three instruments which are made from dried gourd (lauki).

.....

(iii) Three animals used for the purpose of entertainment by people.

.....

(iv) Like snake charmers, there are many communities who use animals for their livelihood

.....

SURVEY

PEOPLE WHO KEEP ANIMALS

Talk to some people in our neighbourhood who keep one or more animals for their livelihood

1. Name the animal they keep.

.....

2. How many animals are there?

.....

3. Is there a separate place for animals?

.....

4. Who looks after them?

.....

5. What do the animals eat?

.....

6. How do they earn their livelihood from them?

.....

.....

Write a slogan to protect animals-



WORKSHEET-5

KNOW ABOUT YOUR CITY-JODHPUR

State in which your city located-.....

Population -.....

Area (in sq ft)-.....

Location of Jodhpur in state-.....

What is it called (other name for the city)-.....

Language Spoken-.....

Famous food -

.....

Traditional Dress –

Man-.....

Woman-.....

Festivals celebrated (paste pictures also)-

.....

.....

Monuments of the city-(Give brief description of each, Paste pictures related)

.....

.....

.....

.....

.....

.....

.....

.....

.....

.....

.....

.....

.....

.....

.....

.....

.....

PICTURES OF MONUMENTS

TASK . BE A WATER SAVIOUR

Water is a natural resource that we derive from the Earth. Without it, we would not be able to live! Imagine a world with no water at all. You wouldn't be able to drink, bathe, wash clothes and so on. Without clean water, other creatures, such as plants, animals, birds and ocean life would also get sick and die. Saving water is the need of the hour. Do you know that as kids you can play a big role in water conservation campaign? In order to create awareness for saving water, you

- Make a poster to create awareness about “ Save Water”.
- Make two book marks on “Save Water” theme by your own imagination. Some ideas for bookmarks are given below



“Life without water is impossible.

Save water, Save life.”

KENDRIYA VIDYALAYA NO.2 AFS JODHPUR
SUMMER VACATION HOMEWORK
Class- V Subject- English

WEEK -1

1. Write any five letter words. (6words)

2. Write six words with letter ‘ D’ .

3. Write six words with letter ‘ M’

4. Write rhyming words of these.

Day _____ *Look* _

Read the words.

Book	Mango	Rose	Camel	Orange	Elephant
Peacock	Sun	Duck	Tiger	Fish	Apple
Jug	Umbrella	Goat	Van	Hen	Queen
X-Mas Tree	Yes	Ice	Zebra	Watch	Kite
Nose	Lion				

Arrange these words in alphabetical order.

WEEK - 2

1. Read the following poem with actions.

Clap , clap, clap

Tap tap tap

Hop hop hop

Stop stop stop

Jump jump jump

Run run run

Clap, clap, clap

Stop stop stop

2. Recitation of poem with proper intonation and action.

3. Write the action words from the poem-

- 1 _____
- 2 _____
- 3 _____
- 4 _____
- 5 _____

5. Write five more action words and make sentences.

- 1 _____
- 2 _____
- 3 _____
- 4 _____
- 5 _____

READING COMPREHENSION

1. Read the passage (unseen) carefully and answer the questions:-

Tilly Smith (a British school girl) was able to save many lives when the tsunami struck Phuket beach in Thailand. Though she has won a number of awards, her parents have not allowed their daughter to be interviewed on television and make into a heroine. Why do you think they took that decision?

The Smith family from South-East England were celebrating Christmas at a beach resort in southern Thailand. Tilly Smith was a ten-year old school girl. Her parents were penny and Colin smith.

It was 26 December 2004. Deadly tsunami waves were already on their way. They had been triggered by a massive earthquake off northern Sumatra earlier that morning.

i) Which place is struck by the tsunami?

Ans. _____

ii) From which country did Tilly Smith belong to?

Ans. _____

iii) Where were the Smith Family celebrating Christmas?

Ans. _____

iv) Name the two natural disasters described in the passage

Ans. _____

v) Pick out the adjective from the sentence –

“They had been triggered by a massive earthquake.” - _____

Read the following passage and answer the questions:

It's a rainy day at my house. It's rainy and windy. The pretty fall leaves are flying in my yard. They are beautiful. They are orange, red, brown, and gold. They are falling off the trees in my yard. I like to watch the leaves fly. The rain and wind make the leaves come off the trees. Soon the leaves will be all on the ground. I can help my mom and dad rake them up. I like this time of year.

1. Where do you think the boy is when he is watching the leaves?

Ans. _____

2. What colours of leaves did the boy see?

Ans. _____

3. What season is it?

Ans. _____

4. What made the leaves come off the trees?

Ans. _____

5. The boy likes to watch the leaves fly. What is making the leaves fly in his yard?

Ans. _____

6. What is the boy going to do when all the leaves are on the ground?

Ans. _____

Writing – Answer the following questions.

1. Why was the girl (Jane) quiet one in the class?

Ans. _____

2. Why did the barber want a lot of food?

Ans. _____

3. Why did the giant reapers/monsters put Gulliver on the ground to look at him?

Ans. _____

4. Why did the captain send the men to the land?

Ans. _____

5. What activity was going on in the class?

Ans. _____

6. Why was the Sultan in a hurry?

Ans. _____

7. Write difference between our land and topsy-turvy land.

Ans. _____

8. Who was Gulliver?

Ans. _____

9. Why are the two children nobody's friend?

Ans. _____

10. When do the children go to school in the topsy-turvy land?

Ans. _____

(GRAMMAR)

a) Rewrite the following sentence using proper punctuation marks or capital letters:-

1. mahesh is the monitor of our class - _____
2. what are you doing - _____
3. wow you are a beauty - _____
4. he is going to school - _____
5. naman kamal and Praveen are friends - _____

(b) Fill in the blanks with the correct degrees of adjectives:-

1. Horse is _____ animal than donkey. (tall)
2. This is the _____ question of all. (difficult)
3. Walking is _____ than skipping. (easy)
4. Parul is the _____ girl in my class.(beautiful)
5. Smile is the _____ medicine in the world.(good)

c) Write the opposites of the following-

- possible - _____ patient - _____
Strong - _____ respect - _____
Nobody - _____ lend - _____

d) Fill in the blanks with proper articles (a, an, the).

- i) Yesterday, Manoj helped..... old woman to cross the road.
- ii) I saw a bird. bird was looking strange.
- iii) Messi isstar player of football.
- iv)earth moves aroundsun.
- v) My father ishonest employee.
- vi) Watchman caughtthief.

Use an appropriate comparative word to compare the noun –

1. "Hemant was walking as slow as a.....tortoise....."
2. Her hair are as white assnow.....
3. This cement is as strong asstone.....
4. Lata's voice is as sweet ascuckoo's.....voice.
5. Raman walks as slow as asnail.....

CREATIVE WRITING



Q. 1 Observe the above given picture and write a short paragraph (minimum 50 words) about it. Give it a title too.

.....

.....

.....

.....

.....

2. Write a short paragraph about your best friend.

.....

.....

.....

.....

.....

3. Write the activities you enjoy during summer season.

.....

.....

.....

.....

.....

SPELLING

• Circle the correct spelling-

- | | | | |
|-------------|--------------|--------------|--------------|
| <i>i)</i> | barran | barren | barrun |
| <i>ii)</i> | pleasure | plaesure | pleasare |
| <i>iii)</i> | dessart | dsesert | dessert |
| <i>iv)</i> | astonishment | astonishmant | estonishment |

Write the jumbled letters in correct order to make meaningful words:

1. D R E I F N - _____
2. V E I T L A T A K - _____
3. B R A G - _____
4. D R A G N - _____
5. O P N I N O - _____

Write one word that is the meaning of the followings –

Talking together on a single topic - D_____

A group of people work on a ship or plane – C_____

A large special meal to celebrate something – F_____

The land surrounded by water – I_____

A huge creature that is extinct now – D_____

Q. write the jumbled words in the correct order to make meaningful sentences-

1. do/name/I/know/his

2. are /my/ there/ forty/ class / children /in

3. drink/ baby/ morning/ milk/ the/ in/ morning

4. is/ fun/ Saturday /day /school /in

5. are/ flying /in /sky /the

6. an / day/ away/ keeps/ apple/ doctor/ the

7. are / playing /children /garden /the /in

8. her/ carrying /was / what / on/ back/ meena

9. whale / largest / the / blue / is/ animal / water

10. cat / to / park /the /walked/ the

कक्षा - पांच

विषय- हिंदी

सत्र- २०२३-२४



कार्यपत्रिका 3

शब्दों को सही क्रम में लगाकर वाक्य बनाओ ।

क) सर्कस जोकर में हँसाता है । सबको

ख) पड़ौसी अच्छे मदद है । करते दूसरों की

ग) मेरठ राजन में रहता है ।

घ) नानाजी गया । राम के साथ बगीचे में

ड.) गयी बाज़ार थी मैं शाम । को माँ साथ के

वाक्यों को शुद्ध रूप में दुबारा लिखो ।

1) यह किताब किसका है ?

2) यहाँ ताज़ा गाय का दूध मिलता है ।

3) मेरे को अपना काम बहुत पसंद है ।

4)बालक ने रोटी खा लिया ।

5) मैं विद्यालय को जा रहा हूँ ।

कार्यपत्रिका 4

1 से 50 तक अंको को शब्दों में लिखो।

_____	_____	_____
_____	_____	_____
_____	_____	_____
_____	_____	_____
_____	_____	_____
_____	_____	_____
_____	_____	_____
_____	_____	_____
_____	_____	_____
_____	_____	_____
_____	_____	_____
_____	_____	_____
_____	_____	_____
_____	_____	_____
_____	_____	_____
_____	_____	_____
_____	_____	_____
_____	_____	_____
_____	_____	_____
_____	_____	_____
_____	_____	_____
_____	_____	_____
_____	_____	_____
_____	_____	_____
_____	_____	_____

दिए गए अंकों को शब्दों में लिखो।

74 - _____

52 - _____

85 - _____

65 - _____

213 - _____

80 - _____

110 - _____

91 - _____

628 - _____

63 - _____

कार्यपत्रिका 5

छात्र प्रतिज्ञा लिखो व याद करो ।

- समाचार पत्र ,कहानी की पुस्तकें जैसे चंपक, नंदन , पंचतंत्र की कहानियाँ, जातक कथाएं आदि पढ़ें।
- प्रतिदिन वर्णों की सुन्दर बनावट में वर्तनी को ध्यान में रखते हुए सुलेख लिखो ।

कार्यपत्रिका 6

समाचार पत्र व कहानी की पुस्तकें पढ़ें तथा किसी एक पुस्तक के बारे में जानकारी दें ।

पुस्तक का नाम - _____

प्रकाशक - _____

मूल्य - _____

पुस्तक में से किसी एक कहानी को संक्षिप्त रूप में लिखो।

कहानी से प्राप्त शिक्षा –

कहानी से सम्बन्धित चित्र बनाओ

कार्यपत्रिका 7

वाक्य बनाओ |

समय _____

बचपन _____

त्योहार _____

अनुशासन _____

इंतज़ार _____

मशहूर- _____

मकर – संक्रांति _____

पसंद - _____

छुट्टियाँ - _____

घूमना - _____

